


Naam: _____

REKENEN

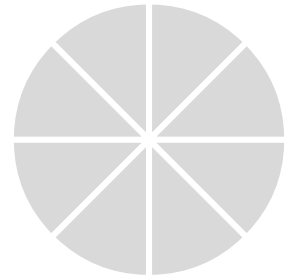
groep 6

Oefenen met breuken. Kleur het juiste deel van de cirkel in.




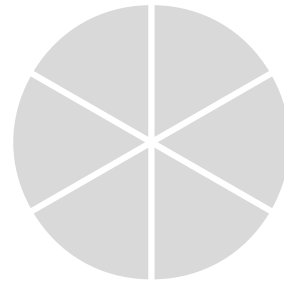
$$\frac{1}{2}$$

$$\frac{1}{8}$$




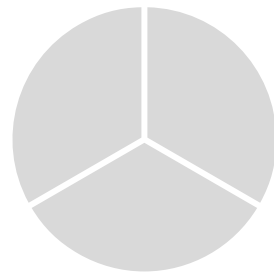
$$\frac{1}{3}$$

$$\frac{1}{6}$$



$$\frac{1}{4}$$

$$\frac{2}{3}$$



$$\frac{1}{5}$$

$$\frac{3}{4}$$

