



Naam:


---

# REKENEN


groep 6

Zoek het juiste plaatje bij de breuk.


$$\frac{1}{2}$$



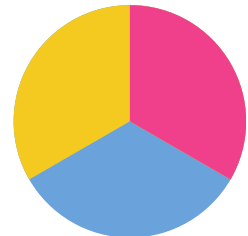
$$\frac{3}{4}$$



$$\frac{1}{3}$$



$$\frac{2}{5}$$



$$\frac{1}{8}$$

