



Naam: _____



NATUUR EN TECHNIEK

groep 3

Van welke dieren zijn deze poten?



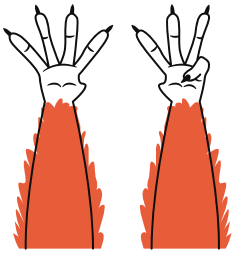
L _ _ _ W



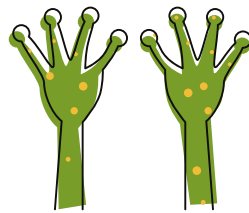
K _ T



L _ _ _ _ N



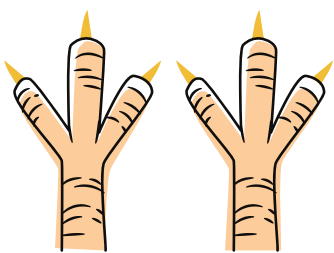
E _ _ _ _ _ N



K _ _ _ _ R



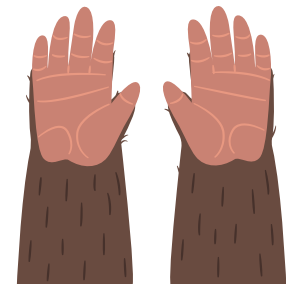
B _ _ R



V _ _ _ L



T _ _ _ R



G _ _ _ _ A



A _ P



IJ _ _ _ _ R



L _ _ _ _ D